

Eighth Semester B.E. Degree Examination, June/July 2016
Control Engineering

Time: 3 hrs.

Max. Marks: 100

Note: Answer FIVE full questions, selecting at least TWO questions from each part.

PART - A

- 1 a. Define control system. Compare open loop and closed loop control systems with an example for each type. (08 Marks)
- b. With a block diagram, explain proportional, proportional plus integral (PI) and proportional plus integral plus derivative (PID) controllers. Mention its characteristics. (12 Marks)
- 2 a. Derive the differential equation and obtain the transfer function $\frac{\theta(s)}{E_a(s)}$ for armature controlled DC motor coupled to mechanical load having inertia J and friction coefficient f_0 . (12 Marks)
- b. Draw the equivalent mechanical system (nodal basis) and write the set of equilibrium equations and obtain force voltage analogy for the system shown in Fig. Q2 (b). (08 Marks)

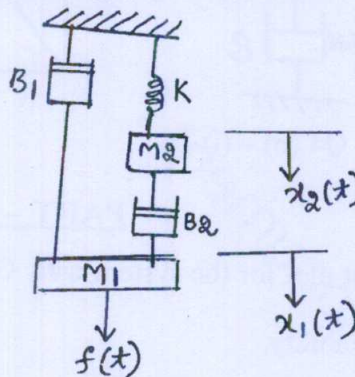


Fig. Q2 (b)

- 3 a. Reduce the block diagram using reduction technique and obtain $\frac{C(s)}{R(s)}$. (10 Marks)

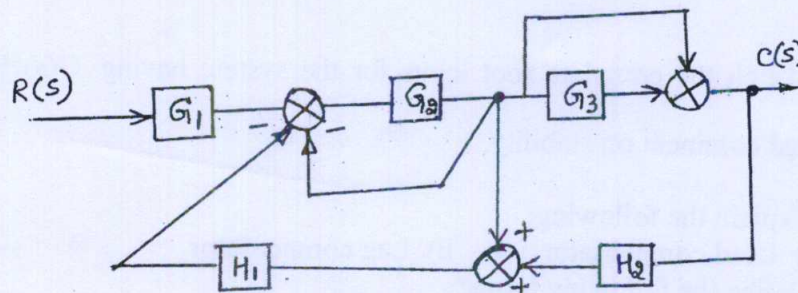


Fig. Q3 (a)

- 3 b. Find the transfer function by using Mason's Gain formula for the signal flow graph shown in the Fig. Q3 (b). (10 marks)

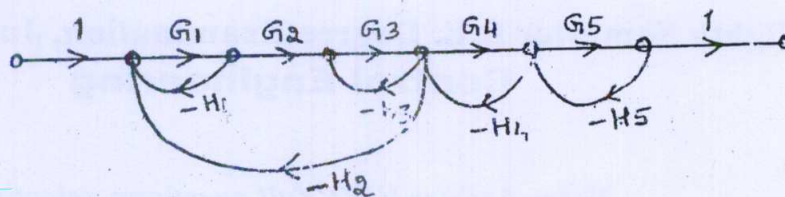


Fig. Q3 (b)

- 4 a. By applying Routh's criterion discuss the stability of the closed loop system whose characteristic equation is, (10 marks)
 $s^6 + 3s^5 + 4s^4 + 6s^3 + 5s^2 + 3s + 2 = 0$
- b. For a spring mass damper system shown in the Fig. Q4 (b) - (i) a force of 9.6 Newtons is applied to the mass. The response \$C(t)\$ is as shown in the Fig Q4 (b) - (ii). Find the value of \$M, B\$ and \$K\$. (10 marks)

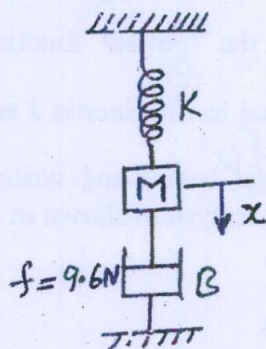


Fig. Q4 (b) - (i)

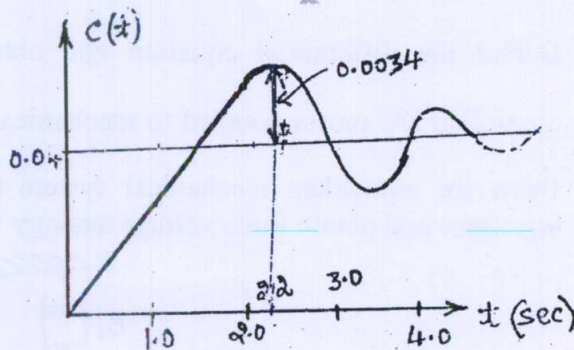


Fig. Q4 (b) - (ii)

PART - B

- 5 Sketch the Nyquist plot for the system with $G(s)H(s) = \frac{(1+0.5s)}{s^2(1+0.1s)(1+0.2s)}$. Find GM and comment on the stability. (20 marks)
- 6 Plot the Bode magnitude and phase diagrams for the open loop transfer function, $G(s)H(s) = \frac{100(s+2)}{s(s+4)(s+5)}$ and discuss the stability of the closed loop system and find GM and PM. (20 Marks)
- 7 Sketch the complete root locus for the system having $G(s)H(s) = \frac{K}{s(s+3)(s^2+3s+11.25)}$ and comment on stability. (20 Marks)
- 8 a. Explain the following: (10 Marks)
 i) Lead compensator ii) Lag compensator
- b. Define the following terms: (10 Marks)
 i) State ii) State variables iii) State vector iv) State space
 v) State equation.
